

Name _____



















Date _____

Grade Level: 3rd Grade | Standard: 3.N.2.5

Nutritious Numbers

Directions: Find the missing number in each number sentence.



















Example: $2 + 2 = 4$. Write the answers in the blanks.

 $12 + \underline{\quad} = 48$	 $17 + \underline{\quad} = 32$
 $19 + \underline{\quad} = 33$	 $9 + \underline{\quad} = 14$
 $7 + \underline{\quad} = 12$	 $7 + \underline{\quad} = 20$
 $13 + \underline{\quad} = 25$	 $12 + \underline{\quad} = 32$
 $4 + \underline{\quad} = 19$	 $6 + \underline{\quad} = 24$
 $8 + \underline{\quad} = 14$	 $5 + \underline{\quad} = 17$
 $9 + \underline{\quad} = 20$	 $3 + \underline{\quad} = 21$
 $3 + \underline{\quad} = 18$	 $4 + \underline{\quad} = 28$
 $14 + \underline{\quad} = 30$	 $8 + \underline{\quad} = 22$

ANSWER KEY

Directions: Find the missing number in each number sentence.

Example: $2 + \underline{2} = 4$. Write the answers in the blanks.

 $12 + \underline{36} = 48$	 $17 + \underline{15} = 32$
 $19 + \underline{14} = 33$	 $9 + \underline{5} = 14$
 $7 + \underline{5} = 12$	 $7 + \underline{13} = 20$
 $13 + \underline{12} = 25$	 $12 + \underline{20} = 32$
 $4 + \underline{15} = 19$	 $6 + \underline{18} = 24$
 $8 + \underline{6} = 14$	 $5 + \underline{12} = 17$
 $9 + \underline{11} = 20$	 $3 + \underline{18} = 21$
 $3 + \underline{15} = 18$	 $4 + \underline{24} = 28$
 $14 + \underline{16} = 30$	 $8 + \underline{14} = 22$